

Good morning Year One! 😊

It is not necessary to print out all of these slides so please read them through carefully so you can decide exactly which are needed as a paper copy.

Thank you.

Session 3

OMS:

Fill in the missing number.

$$1 + 1 + \square = 3$$

Fill in the missing number.

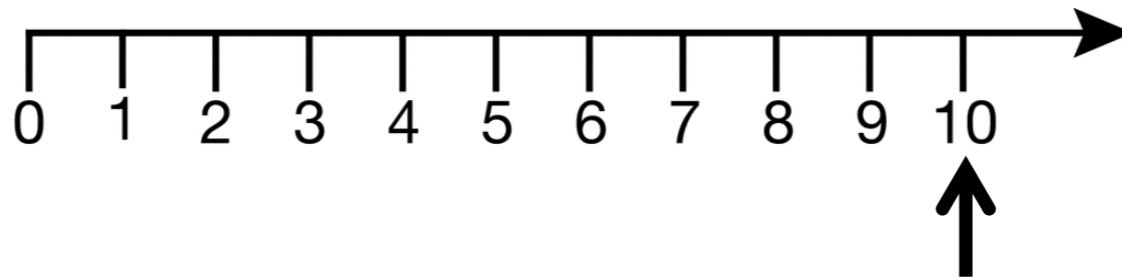
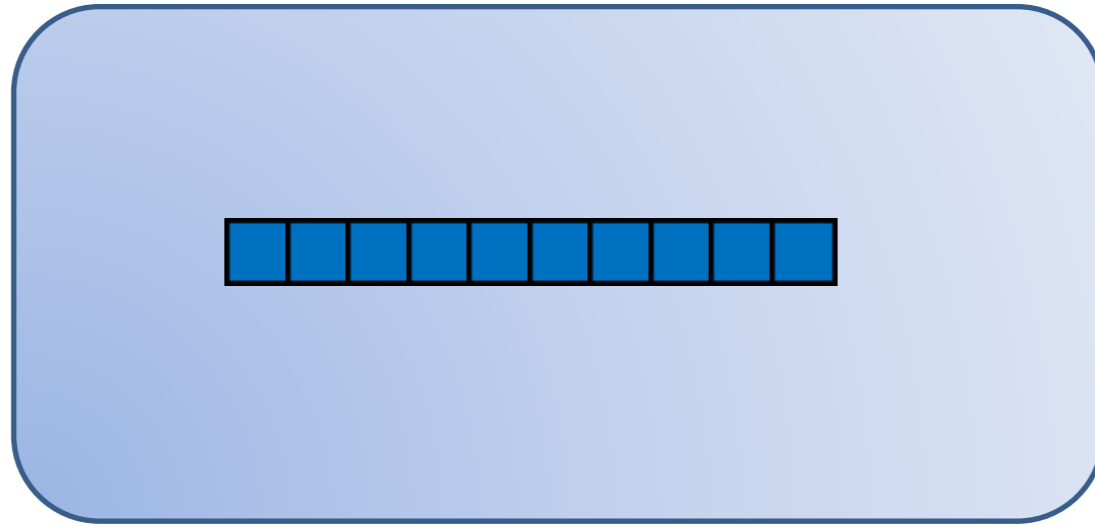
$$4 + 1 + \square = 10$$

Fill in the missing number.

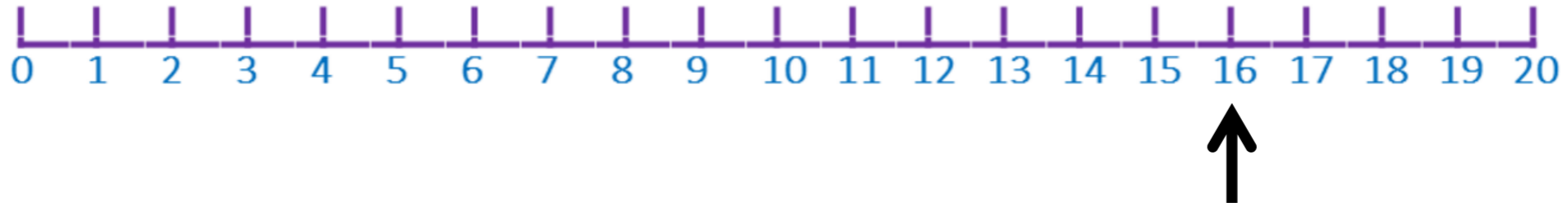
$$10 - \square = 10$$

WALT: Subtract one-digit numbers

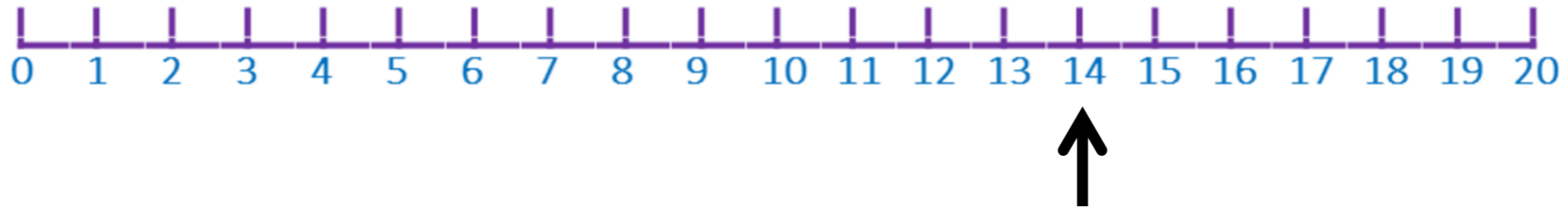
$$10 - 3 =$$



$$16 - 4 =$$



$$14 - 6 =$$



$$15 - 8 =$$



$$13 - 9 =$$



Addition and Subtraction to 20

Spring Mosaic

Solve the calculations to reveal the hidden picture. Each answer has a special colour.

yellow = 0 to 8

green = 9 to 15

red = 16 to 20

| | | | | | | |
|--|-----------|----------|----------|----------|----------|--|
| | | | $10 + 6$ | | | |
| | | | $18 - 2$ | | | |
| | $19 - 3$ | $12 + 5$ | $10 - 5$ | $9 + 9$ | $19 - 2$ | |
| | $10 + 10$ | $17 - 1$ | $4 + 4$ | $18 - 1$ | $9 + 8$ | |
| | | | $8 + 8$ | | | |
| | | | $20 - 1$ | | | |
| | | | $15 - 1$ | | | |
| | $9 + 4$ | | $8 + 3$ | | $13 - 3$ | |
| | | $14 - 4$ | $12 - 2$ | $7 + 3$ | | |
| | | | $1 + 10$ | | | |

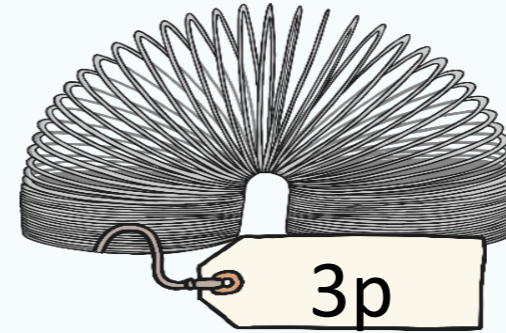




 My 0 to 30 Number Line



0 1 2 3 4 5 6 7 8 9 10 11 12 13 14 15 16 17 18 19 20 21 22 23 24 25 26 27 28 29 30

Plenary:

Welcome to the Toyshop!



I had 20p to spend. I have bought some building bricks.
How much change should I get?